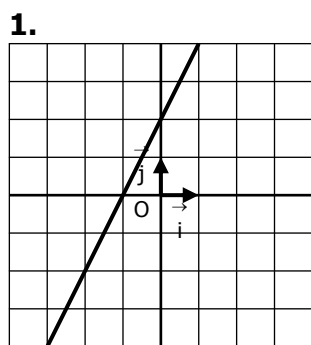
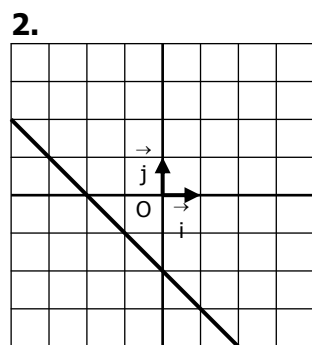


FONCTIONS AFFINES

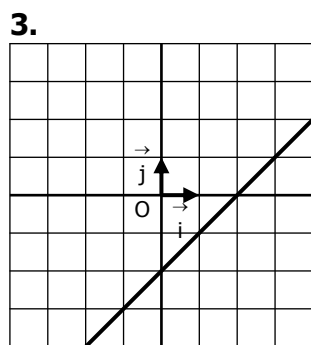
Déterminer graphiquement l'expression de la fonction affine dont on a tracé la courbe :



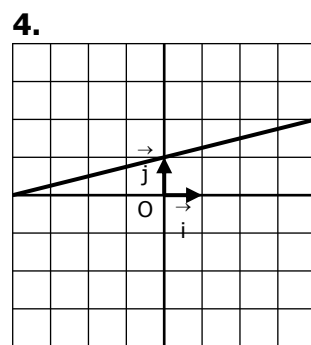
$f(x) = \dots\dots\dots$



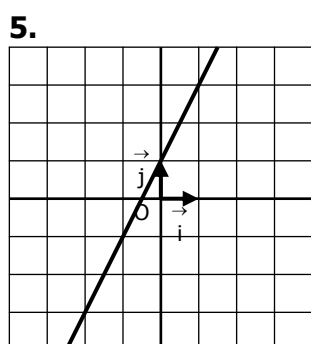
$f(x) = \dots\dots\dots$



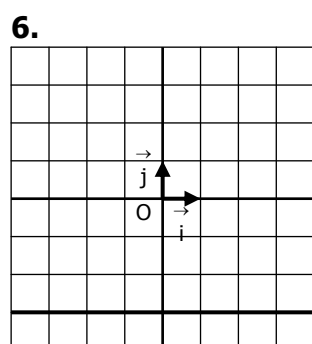
$f(x) = \dots\dots\dots$



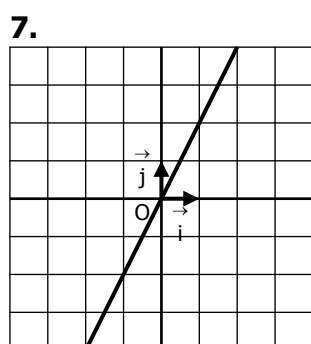
$f(x) = \dots\dots\dots$



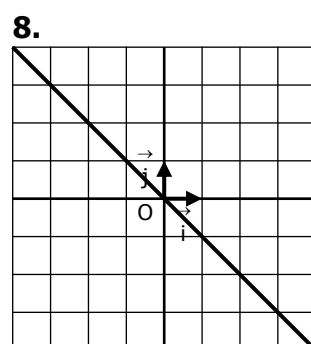
$f(x) = \dots\dots\dots$



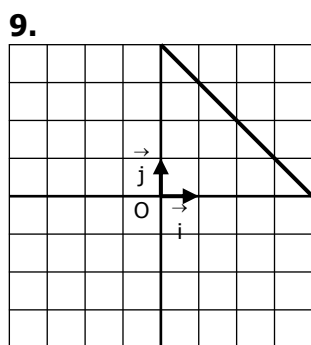
$f(x) = \dots\dots\dots$



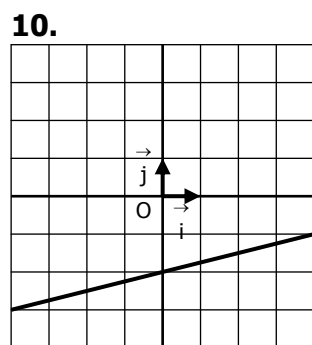
$f(x) = \dots\dots\dots$



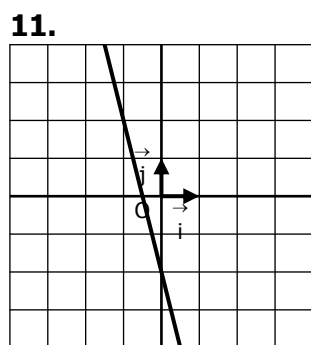
$f(x) = \dots\dots\dots$



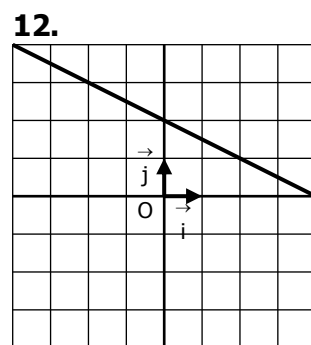
$f(x) = \dots\dots\dots$



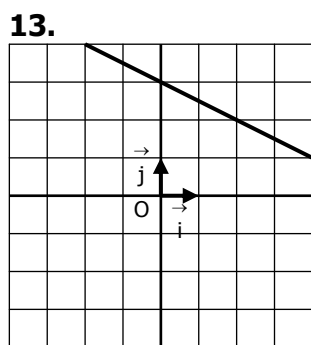
$f(x) = \dots\dots\dots$



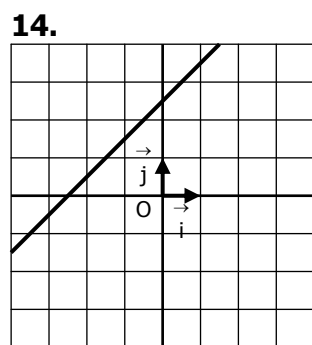
$f(x) = \dots\dots\dots$



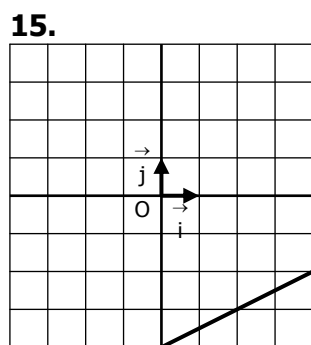
$f(x) = \dots\dots\dots$



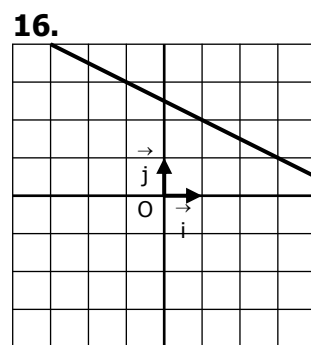
$f(x) = \dots\dots\dots$



$f(x) = \dots\dots\dots$



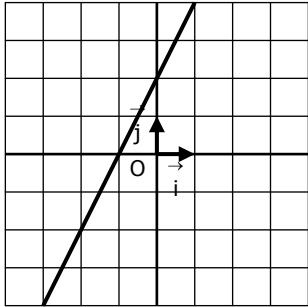
$f(x) = \dots\dots\dots$



$f(x) = \dots\dots\dots$

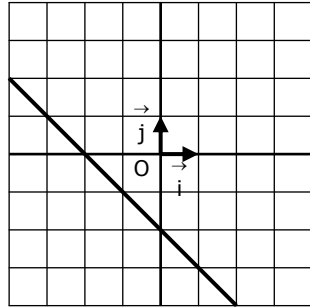
CORRIGE

1.



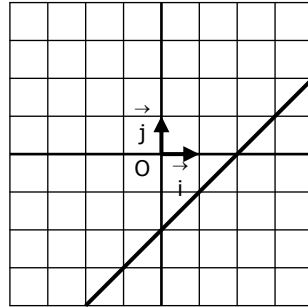
$f(x) = 2x + 2$

2.



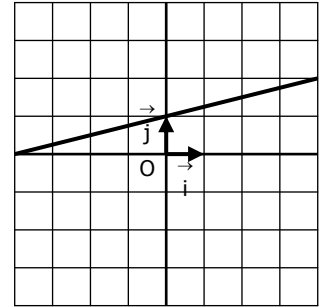
$f(x) = -x - 2$

3.



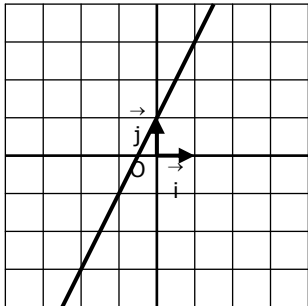
$f(x) = x - 2$

4.



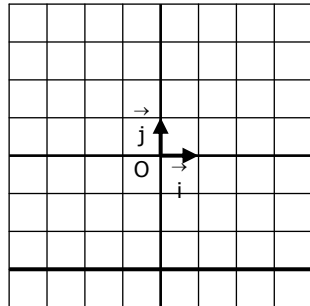
$f(x) = 0,25x + 1$

5.



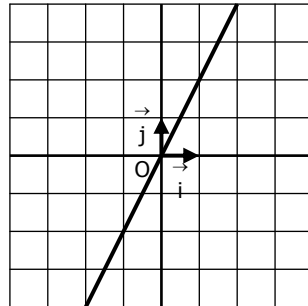
$f(x) = 2x + 1$

6.



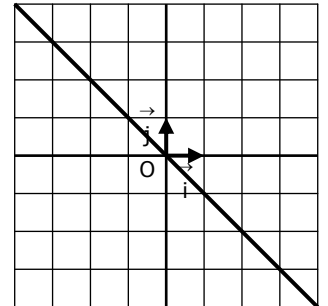
$f(x) = -3$

7.



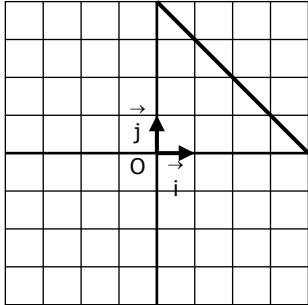
$f(x) = 2x$

8.



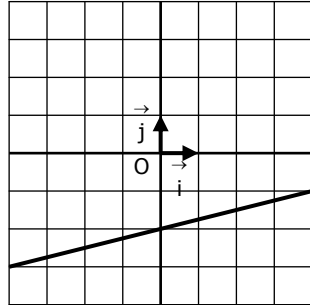
$f(x) = -x$

9.



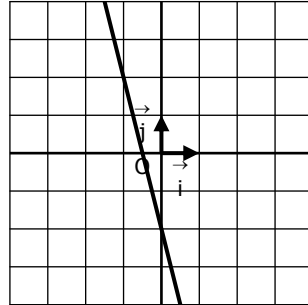
$f(x) = -x + 4$

10.



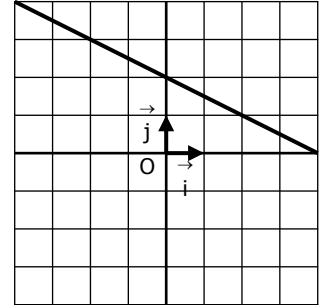
$f(x) = 0,25x - 2$

11.



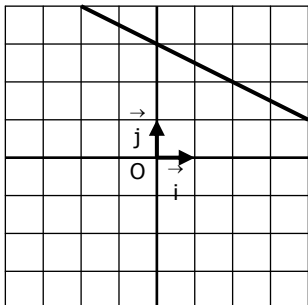
$f(x) = -4x - 2$

12.



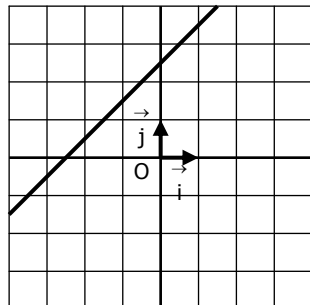
$f(x) = -0,5x + 2$

13.



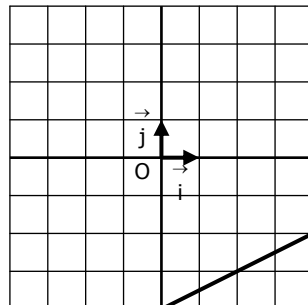
$f(x) = -0,5x + 3$

14.



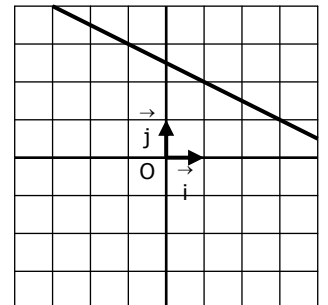
$f(x) = x + 2,5$

15.



$f(x) = 0,5x - 4$

16.



$f(x) = -0,5x + 2,5$